

Organic Chemistry

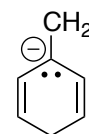
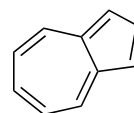
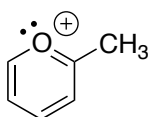
Homework

Name: _____

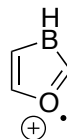
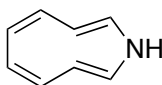
Due Date: Oct. 21, 2016

Circle the molecules that should exhibit aromatic character (obey all rules for aromaticity). This is a five-point homework assignment. Each row is worth one point, and that point will be earned only if the entire row is correct. Once graded, you will have one opportunity to resubmit to replace your grade.

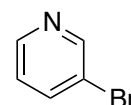
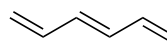
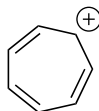
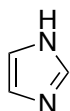
ROW 1



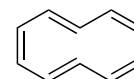
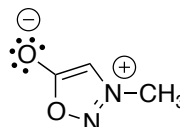
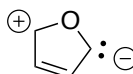
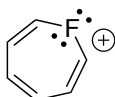
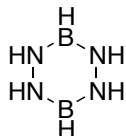
ROW 2



ROW 4



ROW 3



ROW 5

