

Organic Chemistry

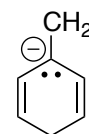
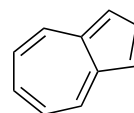
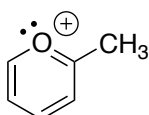
Homework

Name: _____

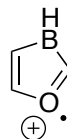
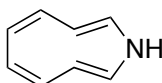
Due Date: Oct. 23, 2017

Circle the molecules that should exhibit aromatic character (obey all rules for aromaticity). This is a ten-point homework assignment. Each row is worth 2 points, and that point will be earned only if the entire row is correct. Once graded, you will have one opportunity to resubmit and replace your grade.

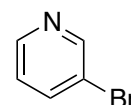
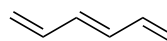
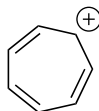
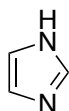
ROW 1



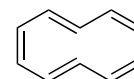
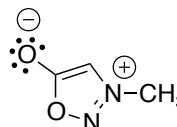
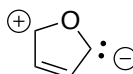
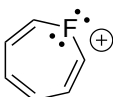
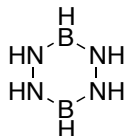
ROW 2



ROW 3



ROW 4



ROW 5

