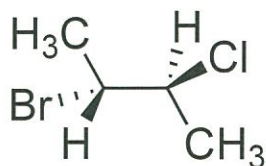


CHAPTER 3: ORGANIC COMPOUNDS AND ALKANES

Practice: Draw a Newman projection of this molecule sighting down the bond that is indicated by the eye.

Drawing staggered Newman Projections



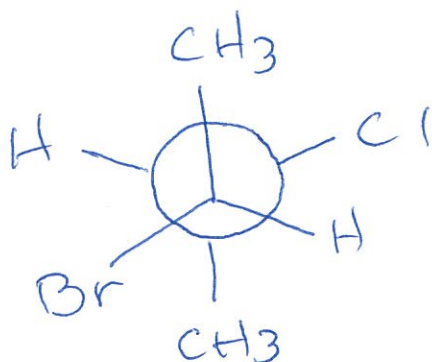
Step 1



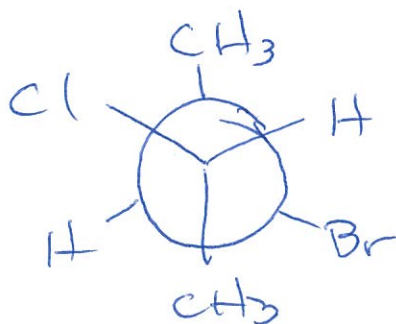

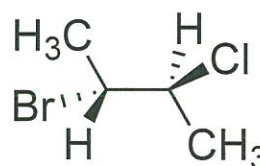
Step 2



Step 3



Practice: Now try drawing a Newman projection sighting down the same bond, but from the other direction.



Practice: Draw a Newman projection of the molecule below in the eclipsed conformation, as shown. You can choose where your perspective (eye) is.

