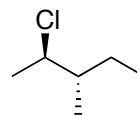
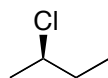
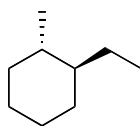


Organic Chemistry

CHM 223

Stereochemistry Problem Set

1. Assign each chiral carbon as R or S and give each of the following compounds an appropriate IUPAC name.



2. For each pair of compounds below, determine whether the pair are enantiomers or diastereomers.

